

## Sample International Benchmark Test Questions

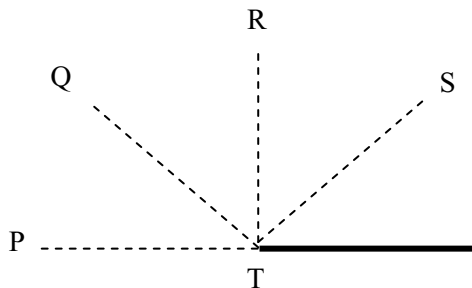
### Class 5 Mathematics

- 1 Last year 34 boys and 28 girls started the school computer club. Nobody left the club. This year 13 more boys and 7 more girls joined the club.

How many people are there in the computer club this year?

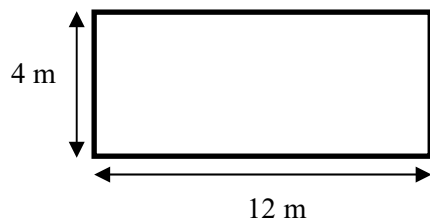
- A 20
- B 54
- C 62
- D 82

- 2 Which line should Michael trace to complete an angle of  $135^\circ$ ?



- A TP
- B TR
- C TQ
- D TS

- 3 Joseph needs to buy tiles for the wall shown.

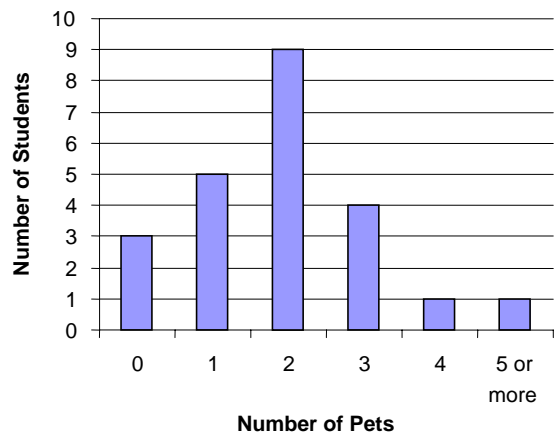


What is the total area?

- A  $3 \text{ m}^2$
- B  $16 \text{ m}^2$
- C  $32 \text{ m}^2$
- D  $48 \text{ m}^2$

- 4 This graph shows the number of pets owned by the students in Class 5.

**Pets Owned by Class 5 Students**



How many students have **2 or more** pets?

- A 9
- B 15
- C 16
- D 23

**Answers to Sample Questions**

- 1 D
- 2 C
- 3 D
- 4 B