



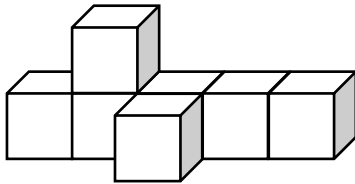
- 3 There are 24 students in Class 7.  
They want to buy class shirts.  
They vote to choose the colour for the class shirt.

Here are the results:

$\frac{1}{4}$  of the class chose blue.  
 $\frac{1}{6}$  of the class chose yellow.  
The rest of the class chose red.

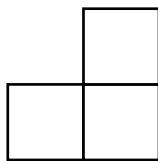
How many chose **red** as the colour for the class shirt?

- A** 4  
**B** 6  
**C** 10  
**D** 14
- 4 Kareem made this object out of small cubes.

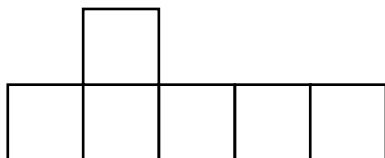


Which one of the following is **not** a possible view of the object?

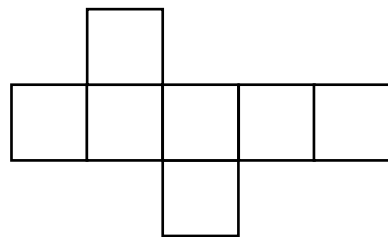
**A**



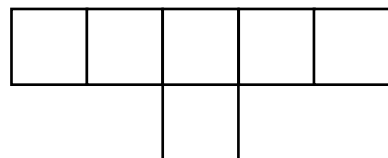
**B**



**C**



**D**



## Answers to Sample Questions

- 1 A
- 2 A
- 3 D
- 4 C